

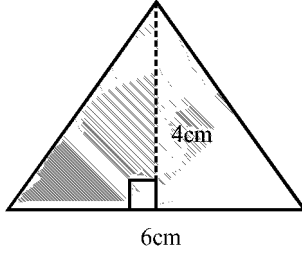
Time: 10 Minutes	Paper Math 6 (T-1)	Total Marks: 10
4th Month, 2nd Week, 2nd Day	Exercise 8.2 Q # 2 (iv, v, vi)	

☆ Answer the following questions: درج ذیل سوالات کے جواب دیں۔

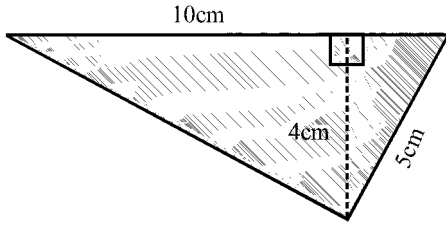
Q.1. Calculate the area and perimeter for each of these parallelograms, trapeziums and triangles. (2x5=10)

دی گئی متوازی اضلاع، ذوزنقہ اور مثلثان کا رقبہ معلوم کریں۔

(i)



(ii)



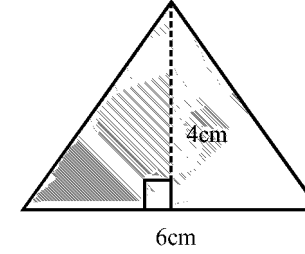
Time: 10 Minutes	Paper Math 6 (T-1)	Total Marks: 10
4th Month, 2nd Week, 2nd Day	Exercise 8.2 Q # 2 (iv, v, vi)	

☆ Answer the following questions: درج ذیل سوالات کے جواب دیں۔

Q.1. Calculate the area and perimeter for each of these parallelograms, trapeziums and triangles. (2x5=10)

دی گئی متوازی اضلاع، ذوزنقہ اور مثلثان کا رقبہ معلوم کریں۔

(i)



(ii)

